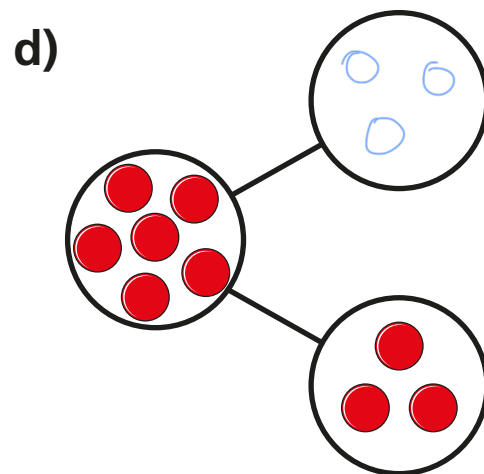
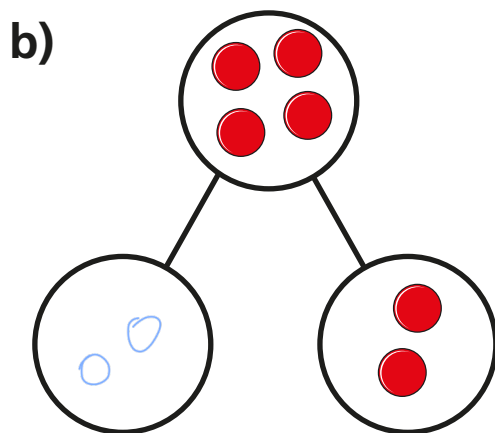
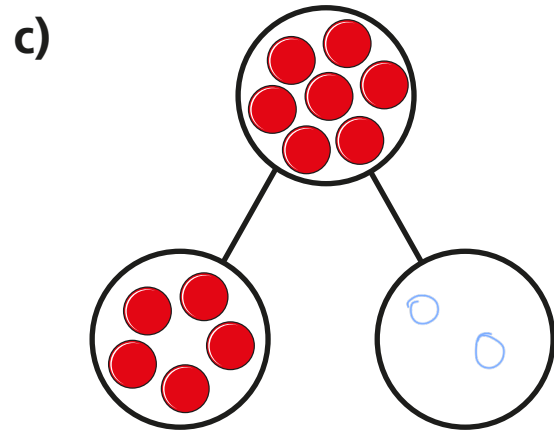
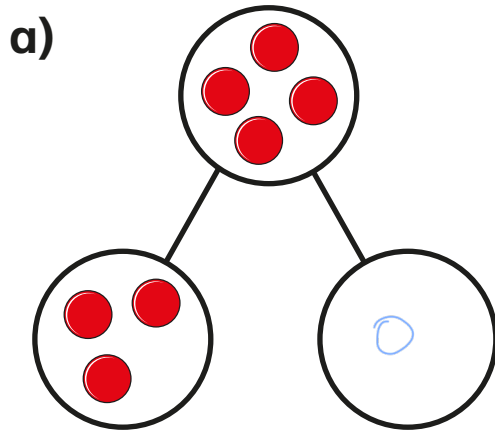


Find a part



I Draw counters to complete the part-whole models.

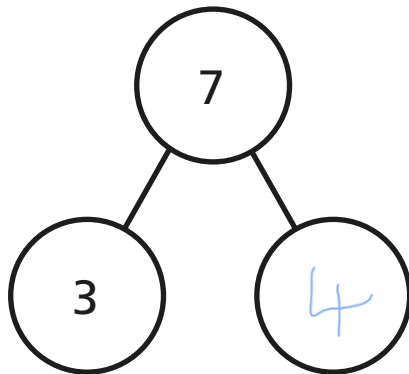


2

Complete the part-whole models.

Complete the sentences.

a)



The whole is

7

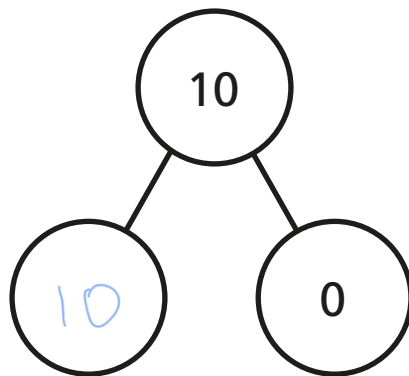
3

is a part.

4

is a part.

b)



The whole is

10

10

is a part.

0

is a part.


3

There are 6 apples in total.

2 apples are green.

The rest are red.

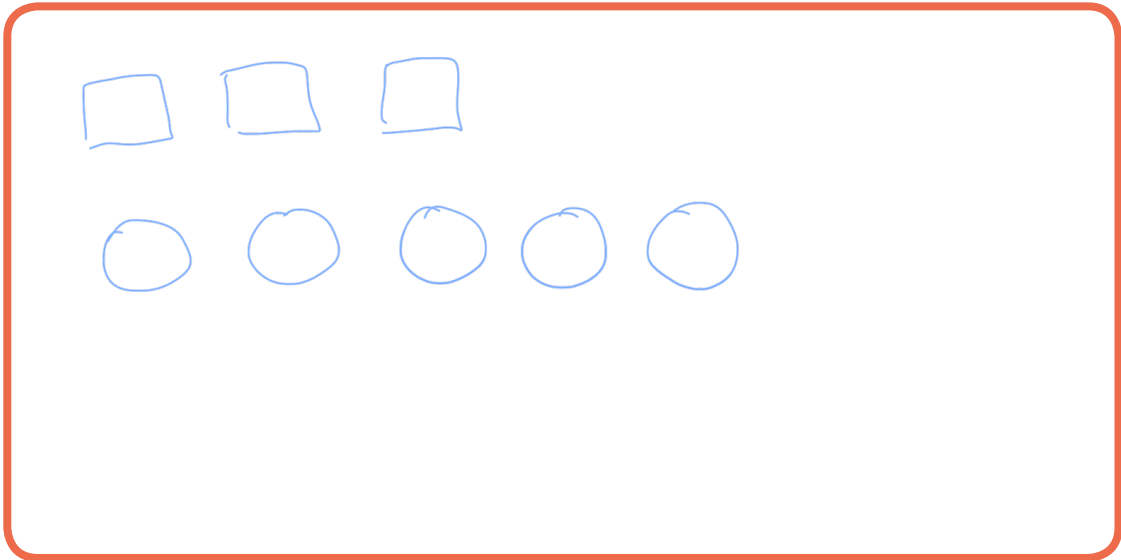
Colour the apples.

Complete the number sentence. $2 +$

4

 $= 6$ 

- 4 There are 8 shapes in total.
3 of the shapes are squares.
The rest are circles.
Draw a picture to show this.



How many circles are there?

5

Complete the number sentence.

$$\boxed{3} + \boxed{5} = \boxed{8}$$

- 5 Complete the number sentences.

$$4 + \boxed{1} = 5$$

$$4 + \boxed{0} = 4$$

$$\boxed{3} + 1 = 4$$

$$5 = \boxed{1} + 4$$